



**Sindhi High School, Bangalore**  
**Periodic Test -2 (2025-26)**  
**Subject: English**

**Grade- VIII**  
**Date:04/12 /25**  
**No. of printed sides: 06**

**Max.Marks:50**  
**Reading Time: 10 Minutes**  
**Writing Time: 2 Hrs.**

**GENERAL INSTRUCTIONS.**

**This Paper contains Three Sections:**

Section A: Reading :10 Marks

Section B & C: Writing& Grammar: 20 Marks

Section D: Literature :20 Marks.

Adhere to the word limit as given

(All Sections are compulsory).

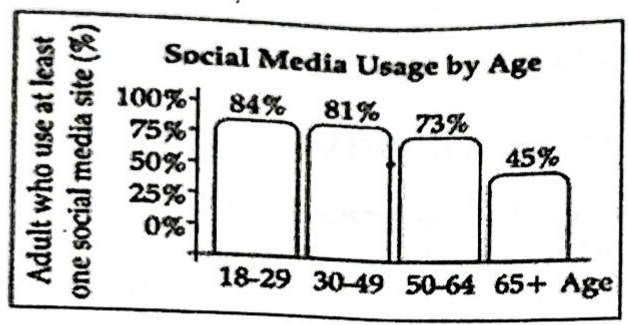
**SECTION - A Reading Skills**

1) Read the following passage and answer the questions that follow;

(10M)

1. If you can't remember the last time, you saw a teenager reading a book, newspaper or magazine, you're not alone. In recent years, less than 20 percent of teens report reading a book, magazine or newspaper daily for pleasure. More than 80 percent say they use social media every day, according to a research published by the World Psychological Association.
2. "Compared with previous generations, teens in the 2010s spent more time online and less time with traditional media, such as books, magazines and television," said lead author of the book yGen and professor of psychology at ABC University. "Time on digital media has displaced the time that was once spent enjoying a book or watching TV."
3. Swaner and her colleagues analyses data concluded from an ongoing study of a nationally representative sample of approximately 50,000 eighth, tenth and twelfth grade students annually. They looked at survey results from 1976 to 2016, representing more than 1 million teenagers. While the study started with only twelfth - graders in the 1970s, eighth and tenth - graders were added in 1991.
4. Use of digital media increased substantially from 2006 to 2016. Among twelfth-graders, internet use during leisure time doubled from one to two hours per day during that period. It also increased 75 percent for tenth-graders and 68 percent for eighth-graders.
5. "In the mid- 2010s, the average twelfth-grader reported spending approximately two hours a day texting, just over two hours a day on the internet - which included gaming - and just under two hours a day on social media," said Swaner. That's a total of about six hours per day on just three digital media activities during their leisure time."

6. In comparison, tenth-graders reported a total of five hours per day and eighth-graders reported four hours per day on those three digital activities. Consequently the spent time in the digital world is seriously degrading the time they spend on more traditional media such as print book and newspapers.
7. The decline in reading print media was especially steep. In the early 1990s, 33 percent of tenth-graders said they read a newspaper almost every day. By 2016, that number was only 2 percent. In the late 1970s, 60 percent of twelfth-graders said they read a book or a magazine almost every day; by 2016, only 16 percent did. Twelfth-graders also reported reading fewer books each year in 2016 compared to how much they read in 1976 and approximately one-third did not read a book (including e-books) for pleasure in the year prior to the 2016 survey. There's no lack of intelligence among young people. However due to over dependence on digital media they find it difficult to focus for long periods of time and to read long-form text. Subsequently they find it challenging to understand complex issues and develop critical thinking skills.



**A. Answer the following in brief:** (1x3=3M)

1. According to the research, what percentage of teens read a book, magazine, or newspaper daily for pleasure?
2. What did the study by Swaner and her colleagues aim to analyze?
3. How did internet use change among twelfth-graders from 2006 to 2016

**B. Choose the correct option:** (1x3=3M)

4. The decline in reading print media is mainly due to:
  - a) Lack of good books
  - b) Over-dependence on digital media
  - c) Increase in school workload
  - d) Poor reading skills
5. In 2016, what percentage of tenth-graders read a newspaper almost every day?
  - a) 33%
  - b) 2%
  - c) 10%
  - d) 16%
6. Find a word in the passage that means 'reduction or fall'.
7. What negative effects of digital media overuse are mentioned in the passage? (2x2=4M)
8. Do you think technology can coexist with reading habits? explain

**SECTION B- Grammar and Creative Writing Skills (20 marks)**

II) Attempt any ONE from (a) and (b) given below:

(1x5=5M)

A) You are Sujoy / Sujata of Nehru Colony, Indore. You recently visited Shimla with your family. You were perturbed to see the tourists throwing empty water bottles and cans all over the place. Write a letter to the editor of national daily in about 120-150 words expressing your concern and offering suggestions to improve the situation

Use the given cues along with your own ideas to compose this letter.

Eco Friendly Travel, create less waste, dispose garbage properly, 40% pollution increase during tourist season, sustainable travel waste and pollution far reaching impact on wildlife, environment, visitors & communities create - clean and healthy vacation destination, Ecological Conservation - A need of the hour.

OR

II B) You are Rahul / Rekha. There are frequent power cuts in your locality. You strongly feel that it is time to shift to solar power. Write a letter to the editor of national daily in about 120-150 words expressing your concern and offering suggestions to improve the situation.

Use the given cues along with your own ideas to compose this letter.

renewable energy • reduce energy bill • completely clean - no air or water pollution, no greenhouse gas effects, carbon free; no emissions, • low maintenance cost

III A) Attempt any ONE from (a) and (b) given below:

(1x5=5M)

You have been served with the following notes on Kashmir. Develop a paragraph on Kashmir, The Paradise of India using all these notes.

Surrounded by mountains, snow covered peaks, beautiful lakes and gardens, tourists throughout the year, Dal lake - house boats, Wark work, walnut work, Kashmiri embroidery - chief handicrafts of Kashmiri people, Heaven on Earth by God, famous saffron spice, warm people, delicious cuisine.

OR

III B) Write a short story in 200 – 250 words, with the help of the cues given below.

Give a suitable title to the story.

Satish was standing on the balcony watching the last rays of the Sun. Loud and angry voices in the street below distracted his attention. He ran down the stairs to see what had happened

.....

V) Complete ANY TEN of twelve of the following tasks as directed. (1x10=10M)

(i) Fill in the blank by using the correct form of the word in the bracket for the given portion of the letter.

Subject: Complaint against Bad Product  
Dear Sir

This is to respectfully submit that I \_\_\_\_\_ (write) this letter to inform you that the TV, bought two days ago from your shop has stopped working.

(ii) Read the given sentence from an article. Identify the error and supply the correction in the sentence

At present situation, the problem of overpopulation comes under a category of global crisis which is growing with each passing second.

Use the given format for your response.

ERROR	CORRECTION

(iii) Rajat shared some information with Sneha about the location of the bookstore.  
**Report Rajat's question.**

Rajat said, "Do you know where the closest book store is?"

(iv) Fill in the blanks by choosing the correct option to complete the given statement.  
He \_\_\_\_\_ (may/shall) become the youngest cricket player ever.

(v) Fill in the blank with the correct form of the verb given in the brackets.  
By the time we arrived, the movie \_\_\_\_\_ (already start).

(vi) Select the option that identifies the error and supplies the correction for the following line.

The receptionist gave us much of the informations we needed.

OPTIONS	ERROR	CORRECTION
1	gave	give
2	of	to
3	informations	information
4	needed	need

(vii) Select the correct option to fill in the blanks for the given line.

There something wrong with the cooker today.

- (a) must be
- (b) should have been
- (c) must have been
- (d) could have been

(viii) Choose the preposition that logically expresses the relation to 'specifications'.  
Kindly send a confirmation of the order at the earliest so that there is no confusion

\_\_\_\_\_ the specifications.

- (a) on    (b) over    (c) under    (d) about

(ix) I can't stand it anymore. I \_\_\_\_\_ the furniture since breakfast.

- (a) am polishing  
(b) have been polishing  
(c) have polished  
(d) was polishing

(x) Complete the line from a self-awareness song by filling the blank with the correct option.

I do not want to have you  
To fill the empty parts of me.  
I want to be full on my own.  
I want to be so complete.  
I light a whole city.

- (a) could  
(b) need  
(c) should  
(d) must

(xi) Fill in the blank to complete the sentence in a teacher's diary by choosing the correct option.

There are pencils in the drawer but none of them are sharpened.

- (a) much  
(b) little  
(c) several  
(d) less

(xii) Report the following sentence said by Garima.

Garima said to me, "I am sorry but I can't come to your birthday party."

Garima told me that she was sorry but she \_\_\_\_\_

### **SECTION C- LITERATURE (20M)**

**V) Read the following extract given and answer the questions that follow: (1x4=4M)**

"He holds the brush. He thunders loud,

'Paint my fortress tall!

Paint gold and rubies, emeralds bright,

And you shall leave this hall!'"

1. What do the words "*gold and rubies, emeralds bright*" tell you about the speaker's desires?

2. If you were the painter, how would you respond to such a demanding order while maintaining your dignity?

3. The figure of speech: "**He thunders loud**" is \_\_\_\_\_

a) alliteration    b) metaphor    c) simile    d) repetition

4. What does the line "*you shall leave this hall*" suggest about the situation?

**VI) Answer the following questions in 40-50 words:**

**(4x2=8M)**

- a) What does *The Case of the Fifth Word* teach us about perseverance and problem-solving?
- b) What lesson can students learn from the chapter *Spectacular Wonders*?
- c) The speakers ask for "*succour, counsel and care.*" What does this request reveal about the importance of seeking guidance and humility in life?
- d) How do patience and consistent effort help Rakesh in *The Cherry Tree*? Relate it to a personal experience.

**VII) Answer the following questions in 80-100 words:**

**(2x4=8M)**

**A) Imagine you are Rakesh. Using the following lines as a reference, write a diary entry expressing your thoughts and feelings:**

"Just one small seed," said Rakesh, and he touched the smooth bark of the tree that he had grown. He ran his hand along the trunk of the tree and put his finger to the tip of a leaf. "I wonder," he whispered. "Is this what it feels to be God?"

**B) The poems *Magic Brush of Dreams*, dreams shape a person's future, while in *Harvest Hymn*, blessings are acknowledged with gratitude. Discuss how these two poems together teach us to dream with purpose and remain humble about our achievements.**



SINDHI HIGH SCHOOL, BENGALURU

PERIODIC TEST-II (2025-26)

SUBJECT: II LANGUAGE KANNADA

Class: 8

Marks: 50

Date:05.12.2025

Reading Time:10minutes

No of Sides: 5

Writing Time:2hours

1. ಕೆಳಗಿನ ಗದ್ಯಾಂಶವನ್ನು ಓದಿಕೊಂಡು, ಕೆಳಗೆ ಕೊಟ್ಟಿರುವ ಪ್ರಶ್ನೆಗಳಿಗೆ ಉತ್ತರವನ್ನು ಆರಿಸಿ ಬರೆಯಿರಿ.

5 × 1 = 5

ಮನುಷ್ಯ ನಿರ್ಸರ್ಗದ ಕೂಸು. ಹಿಂದೆ ಆಹಾರ ಮತ್ತು ಔಷಧಗಳಿಗೆ ಸಂಪೂರ್ಣವಾಗಿ ನಿರ್ಸರ್ಗವನ್ನೇ ಅವಲಂಬಿಸಿ ಬದುಕುತ್ತಿದ್ದ ಕಾಲವೊಂದಿತ್ತು. ತನ್ನ ಸುತ್ತಲಿನ ತೊಗಟೆ, ಎಲೆ, ಹೂ, ಕಾಯಿ, ಹಣ್ಣನ್ನೇ ಹಲವು ಕಾಯಿಲೆಗಳಿಗೆ ಔಷಧಿಯಾಗಿ ಉಪಯೋಗಿಸುತ್ತಿದ್ದ. ನಾಗರಿಕತೆ ಬೆಳೆದಂತೆ ನಿರ್ಸರ್ಗ ಮತ್ತು ಮನುಷ್ಯನ ನಡುವಿನ ಸಂಬಂಧ ಸಡಿಲವಾಗಲಾರಂಭಿಸಿತು. ಇಂದು ಮನೆ ಮದ್ದಿಗೆ ಬದಲು ಆಸ್ಪತ್ರೆಗಳಲ್ಲಿ ದೊರೆಯುವ ಸಿದ್ಧ ಔಷಧಿಗಳಿಗೆ ಮೊರೆ ಹೋಗಿದ್ದಾನೆ. ಸಾಮಾನ್ಯ ಕಾಯಿಲೆಗಳಾದ ಶೀತ, ಕೆಮ್ಮುಗಳಿಗೂ ಸಹ ವೈದ್ಯರ ಬಳಿ ಹೋಗುತ್ತಾರೆ.

ನಮ್ಮ ದೇಶದಲ್ಲಿ ಪ್ರಾಥಮಿಕ ಆರೋಗ್ಯ ಸೌಲಭ್ಯ ದೊರೆತಿರುವುದು ಶೇಕಡ ನಲವತ್ತು ಜನರಿಗೆ ಮಾತ್ರ. ಇಂದಿಗೂ ಹಳ್ಳಿಗಳಲ್ಲಿ ಸಾಂಪ್ರದಾಯಿಕ ಪದ್ಧತಿಯನ್ನೇ ಅವಲಂಬಿಸಿದ್ದಾರೆ. ಈ ದೆಸೆಯಲ್ಲಿ ಕರ್ನಾಟಕ ರಾಜ್ಯ ಅರಣ್ಯ ಇಲಾಖೆ ಗಂಗಾರಗಟ್ಟಿ, ರಾಮನಗರದ ಪವಿತ್ರವನ, ಚಿಕ್ಕಮಗಳೂರಿನ ಸಂಜೀವಿನಿ, ಬೆಂಗಳೂರಿನ ಧನ್ವಂತರಿ ವನ, ಹೀಗೆ ಹಲವಾರು ಕಡೆಗಳಲ್ಲಿ ಔಷಧಿವನಗಳನ್ನು ನಿರ್ಮಾಣ ಮಾಡಿದೆ. ಇದರಿಂದಾಗಿ ಔಷಧಿ ಗಿಡಗಳು ಉಳಿದಿವೆ. ನಮ್ಮ ಸುತ್ತಮುತ್ತಲಿನ ಕಾಣಿಸಿಗುವ ಕೆಲವೊಂದು ಔಷಧಿ ಗುಣವುಳ್ಳ ಗಿಡ ಮೂಲಿಕೆಗಳ ಉಪಯೋಗಗಳ ಬಗ್ಗೆ ತಿಳಿಯಲೇ ಬೇಕಾಗಿದೆ. ಅದರಲ್ಲಿ ಮುಖ್ಯವಾಗಿ **ದೊಡ್ಡಪತ್ರ**- ಈ ಗಿಡವೂ ಹಸಿರೆಲೆಗಳಿಂದ ಗುಂಪಿರುವ ಗಿಡ, ಎರಡು ಅಡಿಯಷ್ಟು ಪೊದೆಯ ರೂಪದಲ್ಲಿ ಬೆಳೆಯುತ್ತದೆ. ಆಯುರ್ವೇದದಲ್ಲಿ ಇದನ್ನು 'ಪರ್ಣಯವಾನಿ' ಎಂದು ಕರೆಯುತ್ತಾರೆ. ಈ ಎಲೆಗಳು ಅಜೀರ್ಣ, ನೆಗಡಿ, ಕೆಮ್ಮು ಆದಾಗ ಔಷಧಿಯ ರೂಪದಲ್ಲಿ ಬಳಸಲಾಗುತ್ತದೆ. ಚಳಿ ಹಾಗೂ ಮಳೆಗಾಲದಲ್ಲಿ ಇದು ಅತ್ಯುತ್ತಮ ಆಹಾರ.

**ತುಳಸಿ**- ತುಳಸಿಗೆ ಭಾರತೀಯ ಸಂಸ್ಕೃತಿಯಲ್ಲಿ ಪವಿತ್ರವಾದ ಸ್ಥಾನವಿದೆ. ಎಲ್ಲಾ ಹಿಂದೂ ಮನೆಗಳ ಮುಂದೆ ನಿತ್ಯ ಪೂಜಿಸುವ ಗಿಡವಾಗಿದೆ. ಆಯುರ್ವೇದದಲ್ಲಿ ಸುರಸಾ, ದೇವ, ದುಂದುಭೀ, ಭೂತಪ್ರಿಯ, ಸ್ವಾಧುಗಂಧಾ ಎಂಬ ಹೆಸರುಗಳಿವೆ. ಇದರ ಎಲೆ ಮತ್ತು ಬೀಜಗಳಿಗೆ ಕೀಟನಾಶಕ ಗುಣವಿದೆ. ಮನುಷ್ಯನ ಪ್ರತಿಯೊಂದು ನೋವಿಗೂ ಇದು ರಾಮಬಾಣವಾಗಿದೆ. ಹುಡುಕುತ್ತಾ ಹೋದರೆ ಔಷಧಿ ಗಿಡಗಳ ಉಪಯೋಗ ಬಹಳಷ್ಟುಯಿದೆ. ಇಂತಹ ಸಸ್ಯಗಳನ್ನು ರಕ್ಷಿಸುವ ಜವಾಬ್ದಾರಿ ನಮ್ಮೆಲ್ಲರದ್ದಾಗಿದೆ.

ಪ್ರಶ್ನೆಗಳು:-

೧. ದೊಡ್ಡ ಪತ್ರೆಯನ್ನು ಆಯುರ್ವೇದದಲ್ಲಿ ಏನೆಂದು ಕರೆಯುತ್ತಾರೆ?

ಅ) ಭೂತಪ್ರಿಯ      ಆ) ಸುರಸಾ      ಇ) ಪರ್ಣಯವಾನಿ      ಈ) ದುಂದುಭೀ

೨. ನಾಗರಿಕತೆ ಬೆಳೆದಂತೆ ಇವರಡರ ಸಂಬಂಧ ಸಡಿಲವಾಗಲಾರಂಭಿಸಿದೆ.

ಅ) ನಿರ್ಸರ್ಗ ಮತ್ತು ಮನುಷ್ಯ      ಆ) ಪ್ರಾಣಿ ಮತ್ತು ಪಕ್ಷಿ

ಇ) ಕಾಡು ಮತ್ತು ನಾಡು

ಈ ಹಳ್ಳಿ ಮತ್ತು ನಗರ

೨. ಕರ್ನಾಟಕ ರಾಜ್ಯ ಅರಣ್ಯ ಇಲಾಖೆಯು ಮುಖ್ಯವಾಗಿ \_\_\_\_\_ ನಿರ್ಮಾಣ ಮಾಡುವುದರಲ್ಲಿ ಆಸಕ್ತಿ ಹೊಂದಿದೆ.

ಖಕರರನ್ನು ಕರಿವರ್ಮ ಲೇಖ

ಅ) ಅರಣ್ಯಭವನ

ಆ) ಔಷಧಿಭವನ

ಇ) ತಂಗುದಾಣ

ಈ) ಉದ್ಯಾನವನ

೪. ಭಾರತೀಯ ಸಂಸ್ಕೃತಿಯಲ್ಲಿ ಈ ಗಿಡವೂ ಪವಿತ್ರವಾದ ಸ್ಥಾನವನ್ನು ಪಡೆದಿದೆ.

ಅ) ತುಂಬೆ

ಆ) ಅಮೃತಬಳ್ಳಿ

ಇ) ದಾಸವಾಳ

ಈ) ತುಳಸಿ

೫. ನಮ್ಮ ದೇಶದಲ್ಲಿ ಈ ಸೌಲಭ್ಯ ದೊರಕಿರುವುದು ನಲವತ್ತು ಶೇಕಡ ಜನರಿಗೆ ಮಾತ್ರ.

ಅ) ಪಡಿತರ ಚೀಟಿ

ಆ) ಪ್ರಾಥಮಿಕ ಆರೋಗ್ಯ

ಇ) ನಿವೃತ್ತಿ ವೇತನ

ಈ) ಸ್ವಗೃಹ

II. ಕೆಳಗೆ ಕೊಟ್ಟಿರುವ ಹಿರೇಮಲ್ಲೂರು ಈಶ್ವರನಾರವರ 'ತಲಕಾಡಿನ ವೈಭವ' ಗದ್ಯಭಾಗವನ್ನು ಓದಿಕೊಂಡು, ಅದರ ಕೆಳಗೆ ಕೊಟ್ಟಿರುವ ಪ್ರಶ್ನೆಗಳಿಗೆ ಉತ್ತರ ಬರೆಯಿರಿ. 5 x 1 = 5

೧೯೫೦ನೆಯ ಇಸವಿ ಅಕ್ಟೋಬರ್ ತಿಂಗಳು ಮಂಗಳವಾರ ೨೦ನೆಯ ತಾರೀಖು, ಶಿವನ ಸಮುದ್ರದ ಪ್ರವಾಸಿಗರ ನಿಲ್ದನೆಯಲ್ಲಿ ಕುಳಿತುಕೊಂಡು ಈ ದಿನದ ಪಯಣದ ವಿವರ ಬರೆಯುತ್ತಿದ್ದೆನೆ. ಈಗ ರಾತ್ರಿ ಹನ್ನೆರಡು ಹೊಡೆದು ಹದಿನೈದು ನಿಮಿಷವಾಗಿದೆ. ಸುತ್ತಣ ಲೋಕವೆಲ್ಲ ಮಲಗಿಕೊಂಡಿದೆ. ನನ್ನ ಬಳಿ ಈ ತಂಗು ಮನೆಯಲ್ಲಿ ನನ್ನ ಗೆಳೆಯರು, ಕನ್ನಡದ ಯಾತ್ರಿಕರು ಮಲಗಿಕೊಂಡಿದ್ದಾರೆ. ಇಂದು ದಿನವೆಲ್ಲ ಅಲೆದು ಅಲೆದು ಅವರು ದಣಿದು ನಿದ್ರೆ ಹೋಗಿದ್ದಾರೆ.

ಶಿವನಸಮುದ್ರವನ್ನು ಒಳಸೇರುವ ಮುನ್ನ ಬಾಗಿಲ ಬಳಿ ನಿಂತ ಸುಬ್ರಮಣ್ಯಮ್ ನಮ್ಮನ್ನು ವಿಶ್ವಾಸದಿಂದ ಸ್ವಾಗತಿಸಿದರು. ನಿಲ್ದನೆಯನ್ನು ಕೂಡಲೆ ಖಾಲಿ ಮಾಡಿಸಿದರು. ಹಾಸಿಗೆ ಹಾಸಿಕೊಟ್ಟರು. ಊಟ ಉಪಚಾರದ ಬಗೆಗೆ ಕೇಳಿದರು. ಕೊನೆಗೆ ಹೋಗುವಾಗ 'ಗುಡ್ ನಾಯಿಟ್' ಅಂದರು. ಸುಬ್ರಮಣ್ಯಮ್ ನೌಕರನೇನೋ ಅಹುದು. ಆದರೆ ಅವರಿತ್ತ ಸ್ವಾಗತ. ವಿಶ್ವಾಸದ ನುಡಿ ನೆನದರೆ ನಾವು ಸುಬ್ರಮಣ್ಯನಿಗಿಂತ ಸಣ್ಣವರು ಎನ್ನುವಲ್ಲಿ ಸಂದೇಹವಿಲ್ಲ!

ತಲಕಾಡಿನ ಇತಿಹಾಸದಲ್ಲಿ ಗಂಗರ ಇತಿಹಾಸ, ಜೈನಧರ್ಮದ ವಿವರಣೆ ಇದೆ. ಕನ್ನಡ ಸಾಹಿತ್ಯದ ಕಥನವಿದೆ. ಹೊಯ್ಸಳ ವಾಸ್ತುಶಿಲ್ಪದ ವಿವರಣೆ ಇದೆ. ಎಲ್ಲಕ್ಕೂ ಮಿಗಿಲಾಗಿ ಕನ್ನಡವೇ ಧರ್ಮ, ಕನ್ನಡವೇ ಬಾಳಿನ ಪರಿಪೂರ್ಣತೆಯೆಂದು ಬಗೆದು ಅದಕ್ಕಾಗಿ ಹೋರಾಡಿ ಮಡಿದ ವೀರರ ಉಜ್ವಲ ಚರಿತ್ರೆ ಇದೆ. ಗಂಗರ ರಾಜ್ಯ ಗಂಗವಾಡಿ ಎಂದು ಹೆಸರಾಗಿದೆ. ಅವರ ಮೊದಲ ರಾಜಧಾನಿ ಕೋಲಾರ. ಕ್ರಿ.ಶ.೫೦೦ ಹೊತ್ತಿಗೆ ಕೋಲಾರದಿಂದ ಹರಿವರ್ಮ ರಾಜಧಾನಿಯನ್ನು ತಲಕಾಡಿಗೆ ತಂದನು. ಅಲ್ಲಿಂದ ಮುಂದಕ್ಕೆ ಐದು ಶತಮಾನಗಳವರೆಗೆ ಅಂದರೆ ಹತ್ತನೆಯ ಶತಮಾನದವರೆಗೂ ಗಂಗರು ಆಳ್ವಿಕೆ ನಡೆಸಿದರು.

ಪ್ರಶ್ನೆಗಳು:-

೧. ಗಂಗರ ಮೊದಲ ರಾಜಧಾನಿ ಯಾವುದು?

೨. ತಲಕಾಡಿನ ಇತಿಹಾಸದಲ್ಲಿ ಯಾವ ಧರ್ಮದ ಬಗ್ಗೆ ವಿವರಣೆಯಿದೆ?

ಲೇಖಕರನ್ನು ಶಿವನಸಮುದ್ರದ ನಿಲ್ದನೆಯಲ್ಲಿ ಯಾರು ಸ್ವಾಗತಿಸಿದರು?

೧. ಹರಿವರ್ಮನ ನಂತರ ಗಂಗರು ತಲಕಾಡಿನಲ್ಲಿ ಎಷ್ಟು ವರ್ಷಗಳ ಕಾಲ ತಲಕಾಡನ್ನು ಆಳಿದರು?

೨. ಲೇಖಕರ ಜೊತೆ ತಂಗುಮನೆಯಲ್ಲಿ ಯಾರೆಲ್ಲರೂ ಮಲಗಿಕೊಂಡಿದ್ದರು?

III. ಕೆಳಗಿನ ಪ್ರತಿಯೊಂದು ಬಹು ಆಯ್ಕೆ ಪ್ರಶ್ನೆಗಳಿಗೆ ನಾಲ್ಕು ಉತ್ತರಗಳನ್ನು ಕೊಡಲಾಗಿದೆ. ಅವುಗಳಲ್ಲಿ ಸರಿಯಾದ ಉತ್ತರವನ್ನು ಆರಿಸಿ ಬರೆಯಿರಿ.

8x1=8

೧. ಕೆಳಗೆ ಕೊಟ್ಟಿರುವ ತತ್ಸಮ-ತದ್ಭವಗಳ ಸರಿಯಾದ ರೂಪವನ್ನು ಗುರುತಿಸಿ ಬರೆಯಿರಿ.

ಅ) ಲೋಕ - ಲೋಗ

ಆ) ಪ್ರಯಾಣ - ಪಯಣ

ಇ) ಕೋಗಿಲೆ - ಕೋಗಿಲೆಗಳು

ಈ) ಹೃದಯ-ಹೃದಯಗಳು

೧) ಅ ಮತ್ತು ಇ

೨) ಆ ಮತ್ತು ಈ

೩) ಇ ಮತ್ತು ಈ

೪) ಅ ಮತ್ತು ಆ

೨. 'ದುರ್ಭರ'- ಈ ಪದದ ಅರ್ಥ

ಅ) ಉದ್ರೇಕ

ಆ) ತಾಳಲಾಗದ

ಇ) ಬೇರ್ಪಡಿಸು

ಈ) ಸಂಪತ್ತು

೩. ಮನೆ : ಮರ :: ಗುಡಿ : \_\_\_\_\_ (ಮೂರನೆ ಪದಕ್ಕೆ ಸಂಬಂಧಿಸಿದ ಪದ ಬರೆಯಿರಿ)

ಅ) ಗುಡಿಸಲು

ಆ) ಅರಮನೆ

ಇ) ಮಂದಿರ

ಈ) ಗೋಪುರ

೪. ಹುಣ್ಣಿಮೆಯಾದರೆ ಸಮುದ್ರದಲ್ಲಿ ಅಲೆಗಳು ಬಹಳ ರಭಸದಲ್ಲಿ ಬರುತ್ತವೆ.- ಗೆರೆಯೆಳೆದ ವಿಭಕ್ತಿ ತಿಳಿಸಿ.

ಅ) ಪ್ರಥಮಾ

ಆ) ದ್ವಿತೀಯಾ

ಇ) ಚತುರ್ಥಿ

ಈ) ಸಪ್ತಮೀ

೫. ಕೆಳಗೆ ಕೊಟ್ಟಿರುವ ಸಂಧಿ -ಸಂಧಿ ಪದಗಳನ್ನು ಹೊಂದಿಸಿ ಬರೆಯಿರಿ.

೧. ರಾಜೇಶ್ವರ

ಅ. ಸರ್ವಣದೀರ್ಘಸಂಧಿ

೨. ದೇವಾಲಯ

ಆ. ಲೋಪಸಂಧಿ

೩. ಕೈಗನ್ನಡಿ

ಇ. ಗುಣಸಂಧಿ

೪. ಬೇರೊಬ್ಬ

ಈ. ಆದೇಶಸಂಧಿ

ಅ) ೧- ಇ

ಆ) ೨- ಅ

ಇ) ೩- ಈ

ಈ) ೪- ಆ

ಆ) ೧- ಆ

ಆ) ೨- ಈ

ಇ) ೩- ಅ

ಈ) ೪- ಇ

ಇ) ೧- ಈ

ಆ) ೨- ಇ

ಇ) ೩- ಆ

ಈ) ೪- ಅ

ಈ) ೧- ಅ

ಆ) ೨- ಆ

ಇ) ೩- ಇ

ಈ) ೪- ಈ

೬. ಹರಿ- ಅರಿ ಈ ಪದಗಳ ಅರ್ಥವ್ಯತ್ಯಾಸ ಕ್ರಮವಾಗಿ ಹೀಗಿದೆ.

ಅ) ನದಿ - ಪ್ರಕಾಶಿಸು

ಆ) ವಿಷ್ಣು- ತಿಳುವಳಿಕೆ

ಇ) ಹರ- ಅರೆ

ಈ) ಹಾರ- ಅಗ

2. ಮೀನುಗಳು ನೀರಿನಲ್ಲಿ ಮುಳುಗಿ ಮುಳುಗಿ ಎದ್ದು ಪಟಪಟನೆ ರೆಕ್ಕೆ ಬಡಿಯುತ್ತಾ ಹೋದವು- ಈ ವಾಕ್ಯದಲ್ಲಿರುವ ದ್ವಿರುಕ್ತಿ ಪದ ಗುರುತಿಸಿ.

ಅ) ನೀರಿನಲ್ಲಿ ಆ) ಪಟಪಟ ಇ) ಮುಳುಗಿ ಮುಳುಗಿ ಈ) ಮೀನುಗಳು

೮. 'ಅಮೃತ' ಈ ಪದದ ವಿರುದ್ಧ ಪದ ಆ) ಅಂಕುಶ ಆ) ವಿಷ ಇ) ಬಂಧನ ಈ) ಹಾಲು

4x1=4

V. ಕೆಳಗಿನವುಗಳನ್ನು ಸೂಚನೆಯಂತೆ ಬರೆಯಿರಿ.

೧. ರಾಜು ತೋಟದಲ್ಲಿ ಕೆಲಸ ಮಾಡುತ್ತಾನೆ.

(ಈ ವಾಕ್ಯವನ್ನು ಭವಿಷ್ಯತ್ ಕಾಲಕ್ಕೆ ಬದಲಿಸಿ)

೨. ದೇಶ ಸುತ್ತು ಕೋಶ ಓದು

(ಗಾದೆಯ ಅರ್ಥವನ್ನು ಬರೆಯಿರಿ)

೩. ಮೈಮರೆ- (ಈ ನುಡಿಗಟ್ಟನ್ನು ಸ್ವಂತ ವಾಕ್ಯದಲ್ಲಿ ಬಳಸಿ)

೪. ಮಕ್ಕಳು ನಾಟಕ ಪ್ರದರ್ಶನ ಮಾಡಿದರು.

(ಈ ವಾಕ್ಯದಲ್ಲಿರುವ ಕರ್ತೃ ಮತ್ತು ಕ್ರಿಯಾಪದ ಗುರುತಿಸಿ)

VI. ನಿಮ್ಮ ಶಾಲೆಯಲ್ಲಿ ನಡೆದ ಕನ್ನಡ ರಾಜ್ಯೋತ್ಸವದ ಕುರಿತು ವರದಿ ತಯಾರಿಸಿ.

4

VII. ಈ ಕೆಳಗೆ ಕೊಟ್ಟಿರುವ ವಿಷಯಗಳಲ್ಲಿ ಯಾವುದಾದರೂ ಒಂದು ವಿಷಯವನ್ನು ಕುರಿತು ಪ್ರಬಂಧ ಬರೆಯಿರಿ.

4

೧. ಗ್ರಂಥಾಲಯ

೨. ನನ್ನ ನೆಚ್ಚಿನ ಪುಸ್ತಕ

VIII. ಈ ಕೆಳಗಿನ ಪ್ರಶ್ನೆಗಳಿಗೆ ಎರಡು ವಾಕ್ಯಗಳಲ್ಲಿ ಉತ್ತರಿಸಿ.

4x2=8

೧. ಬುದ್ಧಿಹೀನರು ಹೇಗೆ ವಿದ್ಯೆಯನ್ನು ಸಂಪಾದಿಸುತ್ತಾರೆ?

೨. ಚಾವುಂಡರಾಯ ಯಾರು? ಆತನ ವಿಶೇಷತೆಯೇನು?

೩. ಗೆಲೆತನದಲ್ಲಿ ಯಾವ ದುರ್ಗುಣಗಳು ಇಲ್ಲವೆಂದು ಹೇಳಲಾಗಿದೆ?

೪ ಶಿವಶರಣರು ಜಗವನ್ನೇ ಗೆದ್ದಿಹ ವಿಚಾರದಲ್ಲಿ ಲಿಂಗಮೃನ ಅನಿಸಿಕೆಯೇನು?

IX. ಕೆಳಗೆ ಕೊಟ್ಟಿರುವ ಪ್ರಶ್ನೆಗಳಿಗೆ ನಾಲ್ಕು-ಐದು ವಾಕ್ಯಗಳಲ್ಲಿ ಉತ್ತರಿಸಿ.

2x3=6

೧. ಸಳನ ವಂಶಕ್ಕೆ 'ಹೊಯ್ಸಳ' ಹೆಸರು ಬರಲು ಕಾರಣವೇನು?

೨. ಗೆಲೆಯರ ಹೇಗೆ ಬಾಳುತ್ತಾರೆ?

X. ಈ ಕೆಳಗಿನ ಸಂದರ್ಭವನ್ನು ಸ್ವಾರಸ್ಯದೊಡನೆ ವಿವರಿಸಿ.

2x3=6

೧. "ಅದು ಕಲಾಶ್ರೀ ವಿಹರಿಸುವ ನಂದನವನ"

ಅಥವಾ

"ಮೋಟಾರು ಓಡಲೊಲ್ಲದು, ಸಾರಥಿ ನಿಲ್ಲಿಸಲಾರನು"

• "ಕಂಡ ಕಂಡವರೇನು ಬಲ್ಲಿದನು"

ಅಥವಾ

"ಜಂಗಮ ಮುಂದೆ ನಿಂದಿದ್ದಡೂ ಹಂಗು ಹರಿಯಬೇಕು"



SINDHI HIGH SCHOOL, K. K. ROAD

Periodic Test - 2 (2025-26)

SUBJECT : HINDI

GRADE: 8

DATE: 2/12/2025

NO. OF PRINTED SIDES: 4

TOTAL MARKS : 30

READING TIME : 10 Minutes

WRITING TIME : 1 Hour

खंड - क

[I] निम्नलिखित गद्यांश को पढ़कर दिए गए प्रश्नों के सही उत्तर चुनकर लिखिए।

1x5=5

भारत के संविधान में 22 भाषाओं को मान्यता दी गई है। भारत संघ की राजभाषा होने का गौरव हिंदी भाषा को प्राप्त हुआ है। संविधान के अनुच्छेद 343 के अनुसार 14 सितंबर, 1949 को हिंदी भाषा को यह सम्मान प्राप्त हुआ। यह दिन अब हिंदी दिवस के रूप में मनाया जाता है। सरकारी काम - काज में प्रयोग होनेवाली भाषा ही राजभाषा कहलाती है। हमारे देश भारत वर्ष में हिंदी अधिकांशतः सरकारी कार्यालयों में लाई जाती है। भाषा के क्षेत्रिय रूप को बोली कहते हैं। भारत देश में हिंदी की कुछ प्रचलित बोलियाँ हैं जैसे - हरयाणवी, राजस्थानी, भोजपुरी, ब्रज आदि। संसार में बोली जाने वाली प्रत्येक भाषा की एक निश्चित लिपि होती है।

1. भारत के संविधान में कितनी भाषाओं को मान्यता दी गई है?

(i) 12 (ii) 22 (iii) 21 (iv) 24

2. हिंदी को कौन सा गौरव भाषा को प्राप्त हुआ है ?

(i) भारत संघ की राजभाषा होने का (ii) भारत संघ की राष्ट्र भाषा होने का  
(iii) भारत संघ की राज्य भाषा होने का (iv) उपर्युक्त सभी

3. हिंदी भाषा को राजभाषा का सम्मान कब प्राप्त हुआ ?

(i) 14 सितंबर, 1948 (ii) 14 सितंबर, 1922  
(iii) 14 सितंबर, 1949 (iv) 14 सितंबर, 1947

4. बोली किसे कहते हैं ?

(i) राजभाषा को (ii) राष्ट्रभाषा को (iii) मातृभाषा को (iv) भाषा के क्षेत्रिय रूप को

5. किसकी निश्चित बोली होती है ?

(i) संसार में बोली जाने वाली प्रत्येक भाषा की (ii) संसार में लिखी जाने वाली प्रत्येक भाषा की

(iii) किसी भी भाषा की नहीं (iv) उपर्युक्त कोई भी नहीं

खंड - ख

[I] संधि विच्छेद कीजिए।

$\frac{1}{2} \times 2 = 1$

1. सन्मार्ग 2. तल्लीन

[II] संधि कीजिए।

$\frac{1}{2} \times 2 = 1$

1. उत् + चारण 2. सम् + मान 3. परि + नाम 4. अनु + छेद

[III] नीचे दिए गए शब्दों में से मूलशब्द और उपसर्ग अलग कीजिए।

$\frac{1}{2} \times 2 = 1$

1. अनपढ़ 2. चौराहा

[IV] दिए गए उपसर्ग से एक-एक शब्द बनाइए।

$\frac{1}{2} \times 2 = 1$

1. भर 2. कु

[V] नीचे दिए गए शब्दों में से मूलशब्द और प्रत्यय अलग कीजिए।

$\frac{1}{2} \times 2 = 1$

1. भूखा 2. भलाई

[VI] नीचे दिए गए प्रत्यय जोड़कर एक-एक शब्द बनाइए।

$\frac{1}{2} \times 2 = 1$

1. वती 2. ई

[VII] विलोम शब्द लिखिए।

$\frac{1}{2} \times 4 = 2$

1. देव 2. संयोग 3. उर्वरा 4. वरदान

[VIII] वचन बदलकर लिखिए।

$\frac{1}{2} \times 4 = 2$

1. आरती 2. बंदरिया 3. वस्तु 4. रोटी

खंड - ग

[I] निम्नलिखित गद्यांश को पढ़कर दिए गए प्रश्नों के सही उत्तर चुनकर लिखिए।

$1 \times 5 = 5$

1992 में अंतर्राष्ट्रीय महिला दिवस के बाद अब यह ज़िला कभी भी पहले जैसा नहीं हो सकता। हैंडल पर झंडियाँ लगाए, घंटियाँ बजाते हुए साइकिल पर सवार 1500 महिलाओं ने पुडुकोट्टई में तूफान ला दिया। महिलाओं की साइकिल चलाने की इस तैयारी ने यहाँ रहने वालों को हक्का-बक्का कर दिया।

इस सारे मामले पर पुरुषों की क्या राय थी? इसके पक्ष में 'आर-साइकिल्स' के मालिक को तो रहना ही था। इस अकेले डीलर के यहाँ लेडीज़ साइकिल की बिक्री में साल भर के अंदर काफी वृद्धि हुई। माना जा सकता है कि इस आँकड़े को दो कारणों से कम करके आँका गया। पहली बात तो यह है कि देर सारी महिलाओं ने जो लेडीज़ साइकिल का इंतजार नहीं कर सकती थी, जैसा साइकिलें खरीदने लगीं। दूसरे, उस डीलर ने बड़ी सतर्कता के साथ यह जानकारी मुझे दी थी - उसे लगा कि मैं बिक्री कर विभाग का कोई आदमी हूँ।

**प्रश्न 1. उपर्युक्त गद्यांश के पाठ का नाम बताएं।**

- (क) बस की यात्रा (ख) जहाँ पहिया है (ग) लाख की चूड़ियाँ (घ) कामचोर

**प्रश्न 2. अंतरराष्ट्रीय महिला दिवस पहली बार कब मनाया गया था?**

- (क) सन् 1992 (ख) सन् 1995 (ग) सन् 1994 (घ) सन् 1991

**प्रश्न 3. साइकिल पर सवार कितनी महिलाओं ने पुडुकोट्टई में तूफान ला दिया ?**

- (क) 1501 महिलाओं ने (ख) 1505 महिलाओं ने  
(ग) 1500 महिलाओं ने (घ) 1503 महिलाओं ने

**प्रश्न 4. लोग हक्के-बक्के क्यों थे?**

- (क) महिलाओं की साइकिल चलाने की तैयारी देखकर  
(ख) महिलाओं की साइकिल बेचने की तैयारी देखकर  
(ग) महिलाओं की साइकिल चलाने की निपुणता देखकर  
(घ) महिलाओं की साइकिल खरीदी देखकर

**प्रश्न 5. सबसे ज्यादा किस डीलर से औरतों ने साइकिल खरीदा?**

- (क) आर - साइकिल्स डीलर  
(ख) आर-आर साइकिल्स डीलर  
(ग) आप साइकिल्स डीलर  
(घ) इनमें से कोई नहीं

[I] निम्नलिखित प्रश्नों के सही उत्तर चुनकर लिखिए।

$\frac{1}{2} \times 4 = 2$

**प्रश्न 1. सुदामा किसके महल के सामने खड़े थे?**

- (क) श्री कृष्ण के (ख) राधा के (ग) सेनापति के (घ) इनमें से कोई नहीं

**प्रश्न 2. सुदामा कौन थे?**

- (क) बलराम के बचपन के मित्र (ख) राधा के बचपन के मित्र

(ग) श्री कृष्ण के बचपन के मित्र (घ) इनमें से कोई नहीं

प्रश्न.3 लाला झाऊलाल को अचानक कितने रुपयों की आवश्यकता हुई?

(क) पाँच सौ (ख) ढाई सौ (ग) साढ़े चार सौ (घ) चार सौ

प्रश्न.4 बिलवासी जी ने पैसे कहाँ से चुराए थे?

(क) अपने मित्र के घर से (ख) अपनी पत्नी के संदूक से  
(ग) एक दुकान से (घ) बैंक से

2X4=8

[III] निम्नलिखित प्रश्नों की उत्तर लिखिए।

1. बिलवासी जी ने रुपयों का प्रबंध कहाँ से किया था? लिखिए।
2. "लाला ने लोटा ले लिया, बोले कुछ नहीं, अपनी पत्नी का अदब मानते थे।" लाला झाऊलाल को बेढंगा लोटा बिलकुल पसंद नहीं था। फिर भी उन्होंने चुपचाप लोटा ले लिया। आपके विचार से वे चुप क्यों रहे? अपने विचार लिखिए।
3. अपने गाँव लौटकर जब सुदामा अपनी झोंपड़ी नहीं खोज पाए तब उनके मन में क्या-क्या विचार आए? कविता के आधार पर स्पष्ट कीजिए।
4. द्वारका से खाली हाथ लौटते समय सुदामा मार्ग में क्या-क्या सोचते जा रहे थे? वह कृष्ण के व्यवहार से क्यों खीझ रहे थे? सुदामा के मन की दुविधा को अपने शब्दों में प्रकट कीजिए।



SINDHI HIGH SCHOOL, K.K.ROAD,BENGALURU  
PERIODIC TEST - 2

SUBJECT: संस्कृतम्

NAME: \_\_\_\_\_

Date: 02/12/2025

CLASS & SECTION : 8 A/B/C

Marks: 30

ROLL NO: \_\_\_\_\_

Reading time: 10 minutes

No. of Sides: 06

Writing Time: 1 hour

खण्ड: - क - अपठितम् गद्यम्

1. अधः लिखितम् गद्यभागं पठित्वा प्रश्नानाम् उत्तराणि पूर्णवाक्येन लिखत ।

भगवान् श्रीकृष्णः अर्जुनम् उपदिशति हे अर्जुन। भवान् गुरोः समीपं गत्वा यथार्थज्ञानं प्राप्तुं प्रयासं करोतु। भवान् विनीतः जिज्ञासुः च भूत्वा गुरोः सेवां करोतु । तत्त्वज्ञानी गुरुः भवते ज्ञानं प्रदास्यति। यतः ये सत्यस्य दर्शनं कृतवन्तः ते एव यथार्थज्ञानिनः भवन्ति ।

अ. एकवाक्येन उत्तरं लिखत ।

(1x2=2)

१. अर्जुनं कः उपदिशति ?

\_\_\_\_\_

२. यथार्थज्ञानिनः के ?

\_\_\_\_\_

आ. यथानिर्देशं लिखत ।

(½x4=2)

१. भगवान् कृष्णः - अत्र विशेषणम् अस्ति - \_\_\_\_\_

२. उपदिशति - पदस्य बहुवचनम् - \_\_\_\_\_


३. आचार्यः - पदस्य पर्यायपदम् - \_\_\_\_\_

४. दूरम् - इत्यस्य विरुद्धार्थकं पदम् - \_\_\_\_\_

खण्ड - ख - रचनात्मक कार्यम्

(1x4=4)

II. चित्रं दृष्ट्वा सत्सम्बन्धानि पञ्च वाक्यानि लिखत ।



मञ्जूषा -

भवनम्, शिलासन्दः, वृक्षः, सन्ति, मार्गः, तृणानि, विद्युत् स्तम्भः, अस्ति, शोभन्ते

१. \_\_\_\_\_
२. \_\_\_\_\_
३. \_\_\_\_\_
४. \_\_\_\_\_

III. संस्कृतभाषया अनुवादं कुरुत ।

(1x4=4)

क्र.सं	English / Hindi	संस्कृतम्
01	I am happy. मैं खुश हूँ ।	

02	They were reading books. वे किताबे पढ़ रहे थे।	
03	It is a beautiful day. यह एक सुन्दर दिन है।	
04	We both play games. हम दोनों खेल खेलते हैं।	

खण्ड: - ग - व्याकरणम्

IV. 'क्तवतु' प्रत्ययान्तेभ्यः शब्देभ्यः एकवचन/ बहुवचन रूपाणि लिखत ।

( $\frac{1}{2} \times 4 = 2$ )

01	कृतवती	
02	धावितवान्	
03	उत्थितवती	
04	लिखितवान्	

V. 'क्तवतु' प्रत्ययान्तेभ्यः शब्देभ्यः अन्यलिङ्ग रूपम् लिखत ।

( $\frac{1}{2} \times 4 = 2$ )

01	प्राप्तवान्	
02	भुक्तवत्यः	
03	खादितवाती	
04	दृष्टवन्तः	

(1X4=4)

V. क्तवतु प्रत्ययान्तपदानि उपयुज्य वाक्यानि पूरयत ।

१. हनूमान् अशोक वाटिकाम् \_\_\_\_\_ (ट)

२. शालायाः छात्राः प्रवासं \_\_\_\_\_ (गम्)

३. ते भोजनार्थम् \_\_\_\_\_ (उपविष)

४. योधाः स्वातन्त्रप्राप्त्यर्थं युद्धं \_\_\_\_\_ (कृ)

खण्डः - घ - पठितम् गद्यम्

VI. अधः लिखितम् गद्यभागं पठित्वा प्रश्नानाम् उत्तराणि पूर्णवाक्येन लिखत ।

असौ महान् समाजसेवकः आसीत् गोपबन्धुदासः। असौ सत्यवादि-वनविद्यालयस्य अध्यापकः, प्रसिद्धेषु पञ्चमित्रेषु अन्यतमः स्वतन्त्रतासङ्ग्रामी चासीत् । (ओडिशाराज्यस्य पुरीजनपदस्य साक्षीगोपालसमीपे सुआण्डी-ग्रामे जन्म लब्धवान्। अध्ययनकालादेव स दरिद्राणां रोगिणां च सेवामकरोत्। सत्यवादि-वनविद्यालये स छात्रान् निःशुल्कम् अपाठयत् । निरक्षरतादूरीकरणाय सः सततं यतते स्म। कार्पासवखनिर्माणाय सः स्वयमेव सूत्रप्रस्तुतिमकरोत्। जन्मभूमेः दुर्दशामवलोक्य स सर्वदा चिन्ताकुलो भवति स्म। महात्मगान्धेः प्रेरणया भारतीयस्वतन्त्रतान्दोलने गोपबन्धुः भागं गृहीतवान्। सः वर्षद्वयं यावत् कारावासं प्राप्तवान् ।

अ. पूर्णवाक्येन उत्तरं लिखत ।

(1x3=3)

अ. गोपबन्धुः महाभागः कुत्र जन्म प्राप्तवान् ?

---

---

आ. गोपबन्धुः किमर्थं सततं यतते स्म ?

---

इ. महात्मागान्धेः प्रेरणया गोपबन्धुः किं अकरोत् ?

VII. अधः लिखितम् पद्यभागं पठित्वा प्रश्नानाम् उत्तराणि पूर्णवाक्येन लिखत ।

भवन्ति नम्रास्तरवः फलोद्रमैः नवाम्बुभिर्दूरविलम्बिनो घनाः ।

अनुद्धताः सत्पुरुषाः समृद्धिभिः स्वभाव एवैष परोपकारिणाम् ॥

अ. पूर्णवाक्येन उत्तरं लिखत ।

(1×3=3)

अ. नम्राः के ?

आ. सत्पुरुषाः कीदृशाः भवन्ति ?

इ. वृक्षः - इत्यस्य पर्यायः कः प्रयुक्तः ?

VIII. अधः लिखितम् पद्यभागं पठित्वा अन्वयं लिखत ।

(½×4=2)

यथा होकेन चक्रेण न रथस्य गतिर्भवेत् ।

एवं पुरुषकारेण विना दैवं न सिध्यति ॥

अन्वयः - यथा हि \_\_\_\_\_ चक्रेण रथस्य \_\_\_\_\_ न भवेत् एवं

\_\_\_\_\_ विना \_\_\_\_\_ न सिध्यति ।

मञ्जूषा -

गतिः, दैवं, एकेन, पुरुषकारेण

(1/2x4=2)

IX. घटनाक्रमानुसारं वाक्यानि संयोज्य पुनः लिखत ।

अ. तस्मै परिवेषितं भक्षं भिक्षुकाय भोजितवान् ।

आ. हस्तपादौ प्रक्षाल्य आसनेषु उपविष्टवन्तः ।

इ. एकदा चत्वारि मित्राणि हरिहरदासस्य गृहं गतवन्तः ।

ई. तेषु एकः गोपबन्धुः भिक्षुकस्य क्रन्दनध्वनिं श्रुतवान् ।

१.

२.

३.

४.

\*\*\*\*\* शुभमस्तु \*\*\*\*\*



# SINDHI HIGH SCHOOL, K.K. Road, BENGALURU

## II Periodic Test 2025-26 Subject: Mathematics

Class: 8

Date:- 1/12/2025

No of printed sides: 3

Max Marks: 50

Reading time: 10min


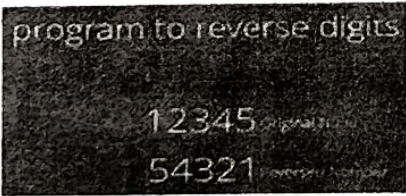
Writing time: 2hours

### GENERAL INSTRUCTIONS

- Write your name, roll number, class and section, date and subject clearly in your answer script.
- All questions are compulsory.
- This question paper contains five Sections A, B, C, D and E.
- Section A consists of 12 MCQs of 1 mark each.
- Section B consists of 4 questions of 2 marks each.
- Section C consists of 4 questions of 3 marks each.
- Section D consists of 2 questions of 5 marks each.
- Section E consists of 2 case based integrated units of assessment questions of 4 marks with subparts of the values of 1, 2 and 1 mark each respectively.

Sl. No.	Section A	Marks 1x12=12
1.	The value of $7^3 \div 7$ is _____. a. 7                      b. 49                      c. 343                      d. $49 \times 7$	1
2.	_____ is the approximate thickness of a sheet of paper after 30 folds, assuming an initial thickness of 0.001 cm. a. 131 cm                      b. 10.7 km                      c. 670 m                      d. 1.024 cm	1
3.	The sum of five consecutive numbers is 95. _____ is the middle number. a. 17                      b. 18                      c. 19                      d. 20	1
4.	_____ is divisible by 11. a. 4686                      b. 5678                      c. 3742                      d. 5416	1
5.	A cube number less than 50 is _____. a. 4                      b. 4                      c. 64                      d. 27	
6.	Which of the following statements is false? a. If a number is divisible by 8, it must be divisible by 4. b. If a number is divisible by both 9 and 10, it is divisible by 90. c. The sum of two consecutive odd numbers is always divisible by 4. d. If a number is not divisible by both 3 and 4, it is divisible by 12.	1
7.	The expression $6m - 3n$ is _____ number. a. Odd                      b. Even                      c. Odd or Even                      d. Prime	1

8.	If $4 \times 7y$ is divisible by 36, _____ is the possible pairs for $x$ and $y$ . a. (1, 8)                      b. (2, 4)                      c. (1, 6)                      d. (3, 9)	1
9.	Riya is measuring a small square sticker for her school project. Each side of the sticker is 0.1 cm long. She wants to calculate the area of the sticker to write it in her project report. What is the area of Riya's square sticker? a. 0.1                      b. 0.001                      c. 0.01                      d. 0.11	1
10.	_____ is a perfect sixth power. a. 729                      b. 64                      c. $729^6$ d. 1	1
11.	<b>Assertion (A):</b> Doubling every day is an example of exponential growth. <b>Reason (R):</b> In exponential growth, the quantity increases by a fixed multiple each time. a) Both A and R are true and R is the correct explanation of A b) Both A and R are true but R is not the correct explanation of A c) A is true but R is false d) A is false but R is true	1
12.	<b>Assertion (A):</b> The algebraic expression $4k \times 3j$ is an even number. <b>Reason (R):</b> An algebraic expression multiplied by an even number is either even or odd. a) Both A and R are true and R is the correct explanation of A b) Both A and R are true but R is not the correct explanation of A c) A is true but R is false d) A is false but R is true	1
<b>Section B</b>		$2 \times 4 = 8$
13.	Simplify: $(4^0 + 2^0)^0 \div \left(\frac{1}{2}\right)^{-2}$	2
14.	If $31y5$ is a multiple of 3, where $y$ is a digit, what could be the value of $y$ ?	2
15.	Express the number in scientific notation: The distance from the Earth to the Moon is 384400000 m.	2
16.	Find the values of A and B $\begin{array}{r} A \ B \\ \times \ A \ 7 \\ \hline 2 \ 1 \ 1 \ B \\ \hline \end{array}$	2
<b>Section C</b>		$3 \times 4 = 12$
17.	If the mass of the Earth is $5.97 \times 10^{24}$ kg and the mass of the Moon is $7.35 \times 10^{22}$ kg, which is heavier and by how much?	3
18.	Express the height of a bundle of 500 papers placed on each other if the thickness of one paper is 0.0016 cm, in standard form.	3

9.	Find the greatest values of a and b so that the odd number '8ab4b' is divisible by both 3 and 5.	3
20.	Prove that the sum of 69 and the number obtained by reversing their digits is divisible by 11.	3
<b>Section D</b>		5x2=10
21.	Simplify and write in a. Usual form i. $5.8 \times 10^2$ ii. $33.61492 \times 10^6$ b. Standard form i. $846 \times 10^7$ ii. $0.000437 \times 10^4$ c. Exponential form $m^5n^{12}(mn)^9$	5
22.	Take the four consecutive numbers 12,13,14 and 15. Place '+' and '-' signs in between the numbers. How many different possibilities exist? Write all of them. Illustrate it using a diagram to systematically list all the possibilities.	5
<b>Section E (case study-based questions)</b>		4x2 = 8
23.	 <p>Lakshamma wants to donate coconuts equal to Seetha's weight and jaggery equal to Geetha's weight. She is wondering how much it would cost? Cost of coconuts is Rs.180per kg and cost of jaggery is Rs.80per kg. weight of Seetha is 21kg and that of Geetha is 52kg.</p> <p>a. What would be the worth (in rupees) of the donated coconuts?  b. What would be the worth (in rupees) of the donated jaggery?  c. Which costs more? Coconuts or Jaggery? By how much?</p>	1 1 2
24.	 <p>Sreelatha says, "I have a number that is divisible by 9. If I reverse its digits, it will still be divisible by 9"</p> <p>a. Express the given number in the general form.  b. State the test of divisibility of 9.  c. If 456a21 is divisible by 3, What is the least value of 'a' in the given number?</p>	1 2 1



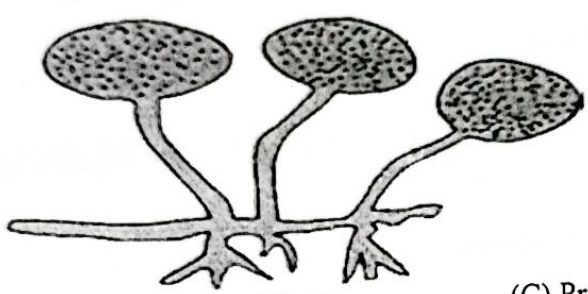
SINDHI HIGH SCHOOL, K K ROAD, BANGALORE - 01  
 PERIODIC TEST - 2 (2025-26)  
 SUBJECT- SCIENCE

Class: VIII  
 Date: 06.12.2025  
 No. of printed sides: 3

Max marks: 50  
 Reading Time: 10 Minutes  
 Writing Time: 2 Hours

**General Instructions:**

- (i) This question paper consists of 20 questions in 3 sections.
- (ii) Section A is Biology; Section B is Chemistry, and Section C is Physics.
- (iii) All questions are compulsory.

S	Questions	Marks
<b>Section A</b>		
	<b>Choose the correct answer.</b>	
1	Identify the organism given below. <div style="text-align: center;">  </div> <p>(A) Fungi                      (B) Algae                      (C) Protozoa                      (D) Bacteria</p>	1
2	The jelly-like substance found between the cell membrane and the nucleus, where most life processes occur, is called _____. (A) Vacuole                      (B) Cell wall                      (C) Cytoplasm                      (D) Nucleus	1
	<p><b>NOTE:</b> In the following questions 3-4, a statement of Assertion is followed by a statement of Reasoning. Choose the correct answer from the following options.</p> <p>A) Both assertion and reason are correct statements, and reason is the correct explanation for the assertion.</p> <p>B) Both assertion and reason are correct statements, but reason is not the correct explanation for the assertion.</p> <p>C) The assertion is correct, but the reason is a wrong statement.</p> <p>D) The assertion is wrong, but the reason is the correct statement.</p>	
3	<p><b>Assertion (A):</b> The number of cells in a multicellular organism is inversely proportional to the size of the body.</p> <p><b>Reason (R):</b> The cell shape and structure relate to its function in the body.</p>	1
4	<p><b>Assertion (A):</b> The nucleoid is not surrounded by a nuclear membrane.</p> <p><b>Reason (R):</b> Bacterial cells do not have a membrane-bound nucleus.</p>	1
5	What would happen if microorganisms did not exist on Earth?	2

6	<p>Aman's grandmother teaches him how to make curd at home. She adds a spoonful of curd to warm milk and leaves it overnight. The next morning, Aman sees that the milk has turned into thick curd.</p> <p>(i) Which microorganism is responsible for curd formation in this case?</p> <p>(ii) How does the addition of curd to warm milk lead to curd formation? Explain the process.</p>	3
7	<p>A group of students wanted to study the effect of temperature on yeast fermentation. They prepared three flasks, each containing sugar solution and yeast.</p> <p><b>Flask A:</b> Kept at room temperature (25°C).</p> <p><b>Flask B:</b> Kept in a refrigerator (5°C).</p> <p><b>Flask C:</b> Kept in warm water (40°C).</p> <p>Each flask was fitted with a balloon at the mouth. After 2 hours, they observed:</p> <p>The balloon on Flask A was moderately inflated.</p> <p>The balloon on Flask B showed no inflation.</p> <p>The balloon on Flask C was highly inflated.</p> <p>(i) Why did the balloon on Flask B show no inflation?</p> <p>(ii) Which biological process was responsible for balloon inflation in Flasks A and C?</p> <p>(iii) Why was the balloon on Flask C more inflated than the balloon on Flask A?</p> <p>(iv) Suggest two industrial applications of this experiment.</p>	4
8	<p>(i) Mention the role of the following components in a cell.</p> <p>(a) Vacuole</p> <p>(b) Chloroplast</p> <p>(c) Cell wall</p> <p>(ii) Diagrammatically differentiate between a cheek cell and an onion cell.</p>	5
<b>Section B</b>		
<b>Choose the correct answer.</b>		
9	<p>Which of the following is an element?</p> <p>(A) Water                      (B) Sodium                      (C) Sugar                      (D) Air</p>	1
<p><b>NOTE:</b> In question 10, a statement of Assertion is followed by a statement of Reasoning. Choose the correct answer from the following options.</p> <p>A) Both assertion and reason are correct statements, and reason is the correct explanation for the assertion.</p> <p>B) Both assertion and reason are correct statements, but reason is not the correct explanation for the assertion.</p> <p>C) Assertion is correct, but the reason is the wrong statement.</p> <p>D) The assertion is wrong, but the reason is the correct statement.</p>		
10	<p><b>Assertion:</b> Iron sulphide is a compound.</p> <p><b>Reason:</b> Properties of iron sulphide are different from those of iron and sulphur.</p>	1
11	Describe the tests used to identify the gases evolved during the electrolysis of water.	2
12	<p>(i) What is meant by an alloy? Support your answer with an example and identify its components.</p> <p>(ii) Explain the purpose for which 'kamsya' was commonly used in ancient periods.</p>	3
13	<p>When iron filings and sulphur powder are mixed and heated, a new substance called iron sulphide is formed. It has properties entirely different from iron and sulphur.</p> <p>(i) What type of change (Physical or chemical) is this? Justify.</p> <p>(ii) Why does iron sulphide not have the properties of iron or sulphur?</p> <p>(iii) Write the chemical formula of iron sulphide and explain how it proves that iron sulphide is a compound.</p>	4

14	(i) Is air a mixture? What kind of mixture is it? (ii) Imagine you are in a closed room with no windows. How can you judge that the air in the room is a mixture? (iii) Give an example from daily life that shows how a mixture's components can be separated physically.	5
----	--	---

**Section C**

15	<b>Choose the correct answer.</b> A balloon sticks to a wall after rubbing on hair because (A) the wall becomes magnetic (B) balloon gains an electric charge (C) gravity increases (D) elastic force increases	1
----	--	---

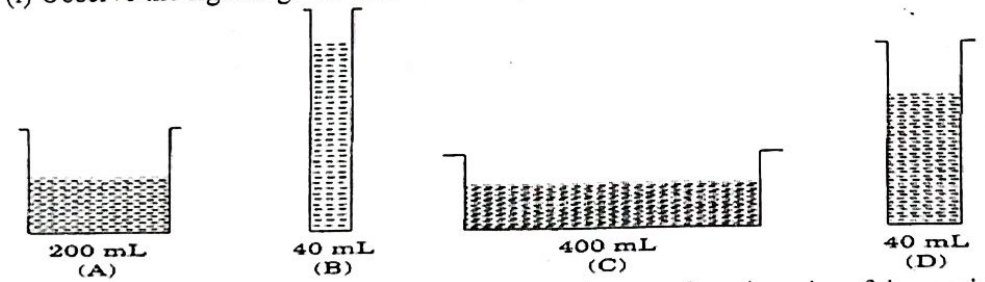
**NOTE:** In question 16, a statement of Assertion is followed by a statement of Reasoning. Choose the correct answer from the following options.  
 A) Both assertion and reason are correct statements, and reason is the correct explanation for the assertion.  
 B) Both assertion and reason are correct statements, but reason is not the correct explanation for the assertion.  
 C) Assertion is correct, but the reason is the wrong statement.  
 D) The assertion is wrong, but the reason is the correct statement.

16	<b>Assertion:</b> Unlike poles attract each other. <b>Reason:</b> The Magnetic force acts only when magnets come in contact with each other.	1
----	---	---

17	A mass of 2.0 kg is hung from a spring balance. What reading (force) will the balance show in Newton?	2
----	---	---

18	When a nail is hammered into a wooden plank, it goes in easily from the pointed end but not from the flat end. Justify using a physics concept.	3
----	---	---

19	A shopkeeper picks up metal keys using a magnet instead of bending to pick them by hand. (i) Why is he able to pick them up without touching? (ii) Which objects will not be attracted? (iii) Why don't they get attracted to some materials? (iv) What will happen if the magnet is heated strongly?	4
----	---	---

20	(i) Observe the figures given below carefully.  Volume of water in each vessel is shown above. Arrange them in order of decreasing pressure at the base of each vessel. Explain the reason. (ii) Why do sea divers wear specially designed suits? Justify.	5
----	---	---

\*\*\*\*\*



SINDHI HIGH SCHOOL, K.K. Road  
Periodic Test 2 (2025-26)  
Subject: Social Science

Class:8

Date: 08/12/25

No. of printed sides: 2

Marks: 50

Reading Time- 10 minutes

Writing Time- 2 hours

**SECTION - A**

1.	First Battle of Panipat took place between _____ and _____. (Fill in the blanks)	1
2.	Aurangzeb ordered Guru Tegh Bahadur to convert to _____.	1
3.	In what ways Akbar stabilise his reign?	3
4.	a) Who were the Rajputs? b) Examine the role played by them during the Mughal period.	1 2
5.	Differentiate the political strategies between the Delhi Sultanate and the Mughals.	5

**SECTION - B**

6.	Which statement best explains how humans convert nature into resources? a. By studying the environment b. By using technology to extract and modify natural elements c. By leaving nature untouched d. By worshipping natural entities	1
7.	Energy resources are mainly used for — a. Growing crops b. Producing power and running industries c. Making furniture d. Creating art and sculpture	1
8.	Explain the three main categories of natural resources with examples.	3
9.	“Nature works in cycles”. Justify with examples.	3

10.	Distinguish between renewable and non-renewable resources.	5
<b>SECTION - C</b>		
11.	_____ is generally brought into force through an instrument called _____ and Act.	1
12.	The Constitution lays down the key functions that the Parliament needs to fulfil. Identify their functions.	3
13.	State the importance of Prime Minister.	3
14.	Prove the statement "Judiciary is responsible for interpreting and applying the laws of the land".	5
<b>SECTION - D</b>		
15.	Imagine you are a business person and you can raise money from public through this market. Choose the correct option. a. City market    b. Weekly market    c. Stock market    d. Global market	1
16.	Suggest two new and advanced technological developments which makes our lives easier and how?	3
17.	Human effort is involved in every stage of production. Elaborate with an example.	3
18.	Analyse the various tasks performed by an entrepreneur.	5